



# OMG-OCSMP-MBI300<sup>Q&As</sup>

OMG-Certified Systems Modeling Professional - Model Builder –  
Intermediate





**Pass OMG OMG-OCSMP-MBI300 Exam with 100%  
Guarantee**

Free Download Real Questions & Answers **PDF** and **VCE** file from:

<https://www.pass4itsure.com/omg-ocsmp-mbi300.html>

100% Passing Guarantee  
100% Money Back Assurance

Following Questions and Answers are all new published by OMG  
Official Exam Center

-  **Instant Download** After Purchase
-  **100% Money Back** Guarantee
-  **365 Days** Free Update
-  **800,000+** Satisfied Customers



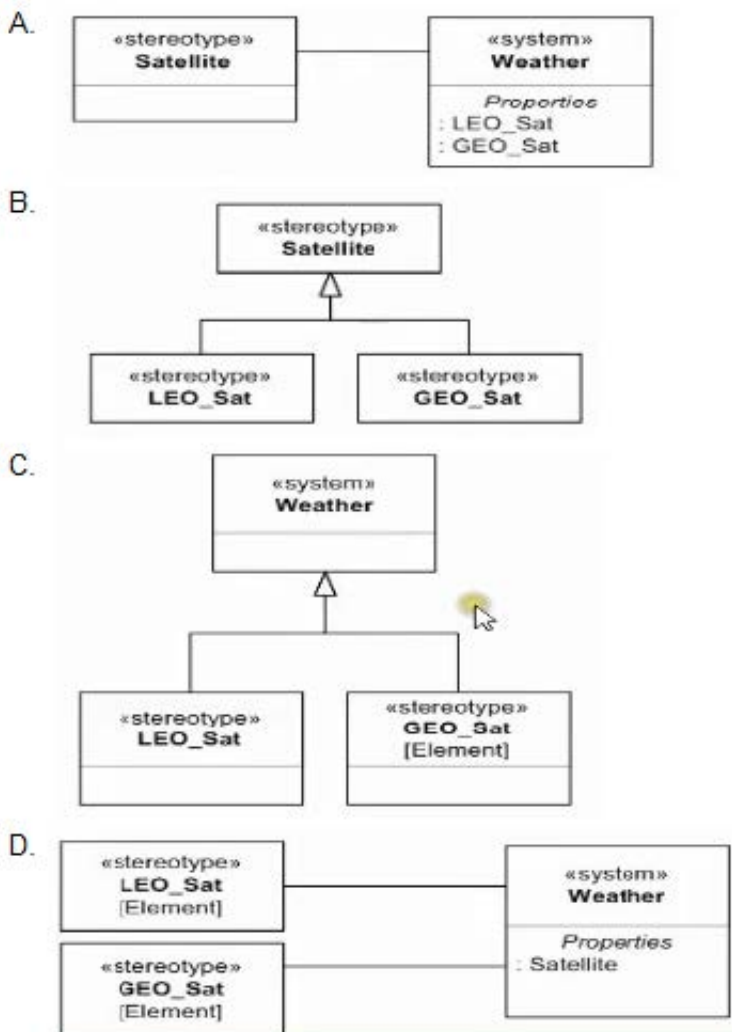


### QUESTION 1

Choose the correct answer.

An engineer is building a model of a system that includes both Low Earth Orbit (LEO) and Geosynchronous Orbit (GEO) satellites.

Which diagram fragment shows a well-designed set of domain stereotypes that can be applied to the blocks representing those system elements?



A. Option A

B. Option B

C. Option C


D. Option D

Correct Answer: B

**QUESTION 2**

Choose the correct answer.

Given the following diagram:



What is the significance of typing the connector with an association?

- A. Only items compatible with Card Connection may pass over connector c1. There are no other implications
- B. If SD Card and Card Reader blocks ever have ports, they must be compatible with the Card Connection association
- C. Card Connection represents the part that d uses to connect SD Card to Card Reader, eg the arrangement of contact points
- D. An association must exist between the SD Card block and Card Reader block, and not just between parts in the Digital Picture Frame block.

Correct Answer: D

---

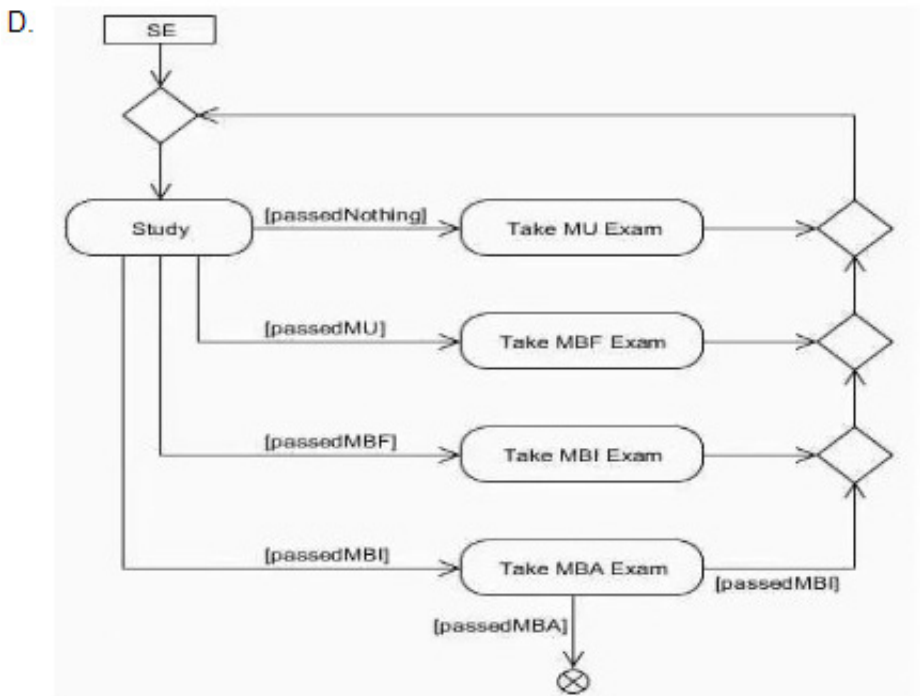
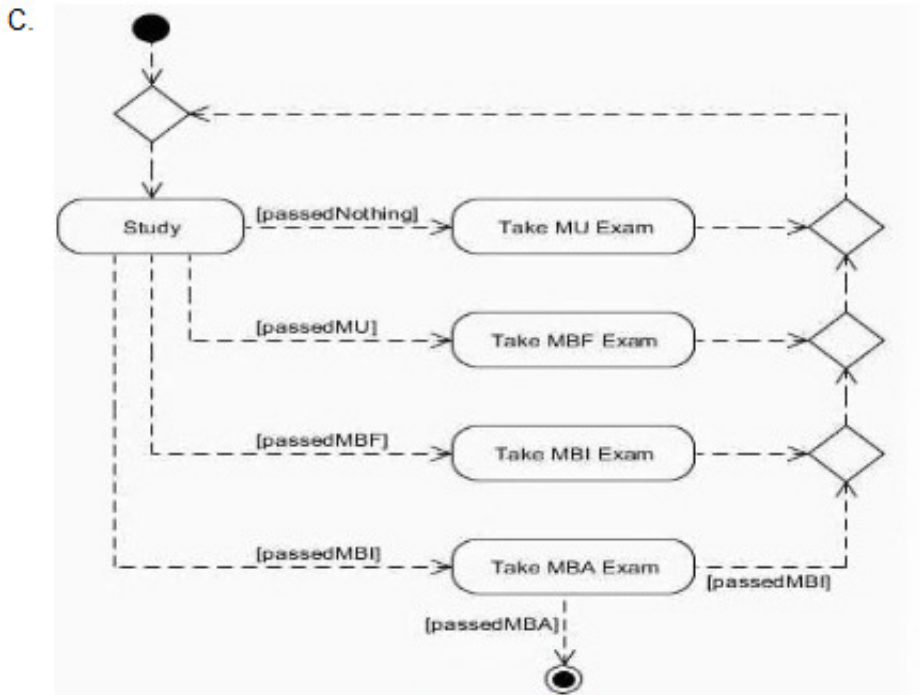
**QUESTION 3**

Choose the correct answer.

To "show what you know" about SysML a Systems Engineer (SE) must take a total of four examinations in order Model User (MU), Model Builder Fundamental (MBF), Model Builder intermediate (MBI) and Model Builder Advanced (MBA). The SE must also study before taking each exam.

Which activity diagram fragment correctly uses object state constraints to document the process of studying and taking the exams, ensuring that the exams are taken in order of increasing difficulty, and allowing for the possibility that exams may have to be repeated?





A. Option A

B. Option B

C. Option C

D. Option D

Correct Answer: B



#### QUESTION 4

Choose the correct answer.

Which diagram type is commonly used to create a bill of materials?

- A. Package diagram
- B. Activity diagram
- C. Parametric diagram
- D. Requirements diagram
- E. internal block diagram
- F. Block definition diagram

Correct Answer: C

---

#### QUESTION 5

Choose the correct answer.

What is a property that may be calculated by analysis of the model?

- A. a derived property
- B. an analysis property
- C. a calculated property
- D. an estimation property
- E. a replacement property

Correct Answer: D

[Latest OMG-OCSMP-MBI300 Dumps](#)

[OMG-OCSMP-MBI300 PDF Dumps](#)

[OMG-OCSMP-MBI300 Braindumps](#)