



OMG-OCSMP-MBI300^{Q&As}

OMG-Certified Systems Modeling Professional - Model Builder –
Intermediate





**Pass OMG OMG-OCSMP-MBI300 Exam with 100%
Guarantee**

Free Download Real Questions & Answers **PDF** and **VCE** file from:

<https://www.pass4itsure.com/omg-ocsmp-mbi300.html>

100% Passing Guarantee
100% Money Back Assurance

Following Questions and Answers are all new published by OMG
Official Exam Center

-  **Instant Download** After Purchase
-  **100% Money Back** Guarantee
-  **365 Days** Free Update
-  **800,000+** Satisfied Customers

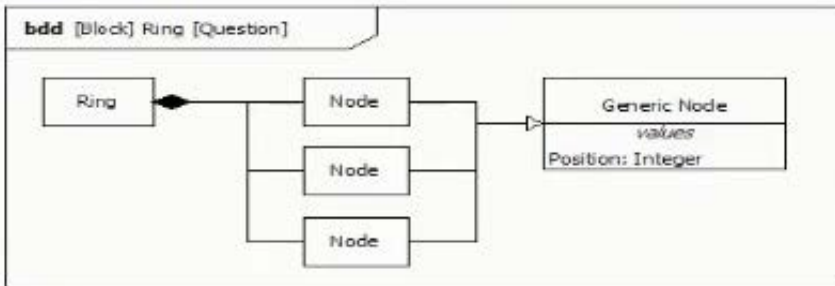




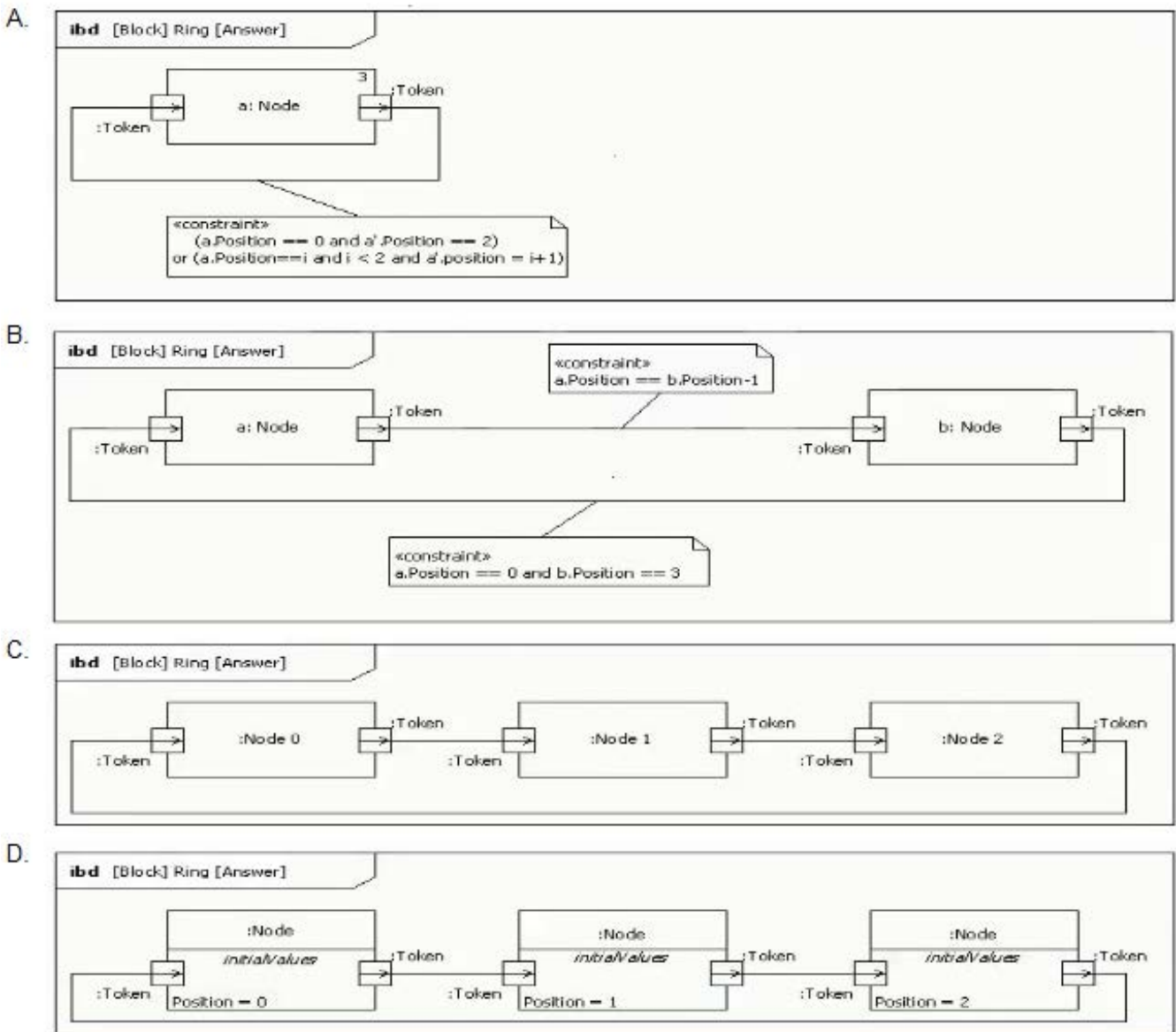
QUESTION 1

Choose the correct answer

Given the following bdd for a token ring network, in which a token flows from node n to node $n+1$ except that when it reaches the node at the maximum position n flows to the node at the minimum position.



Which ibd correctly models this behavior?



A. Option A

B. Option B

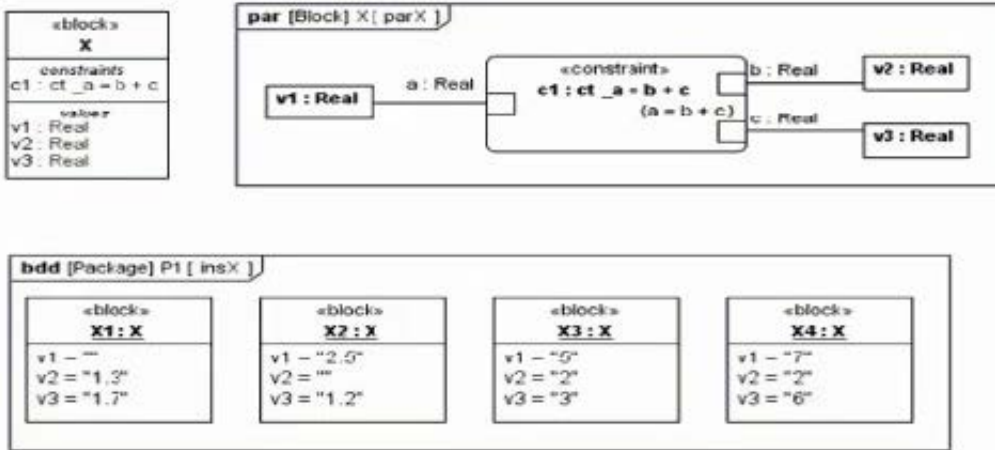
C. Option C

D. Option D

Correct Answer: B

QUESTION 2

Choose the correct answer. Given the following model:



Which statement is true?

- A. Only Instances X1 and X? are invalid
- B. Only instances X2 and X4 are invalid.
- C. Only instance X4 is invalid.
- D. All instances (X1, X2, X3, and X4) are valid.

Correct Answer: C

QUESTION 3

Choose the correct answer.

Given the following diagram fragment:



What does the multiplicity at the actor end mean?

- A. At most two Initiator actor instances can perform the use case
- B. Two Initiator actor instances are required to trigger the use case
- C. Two Initiator actor instances are required to participate in the use case.
- D. Multiplicities carry no meaning on use case diagrams

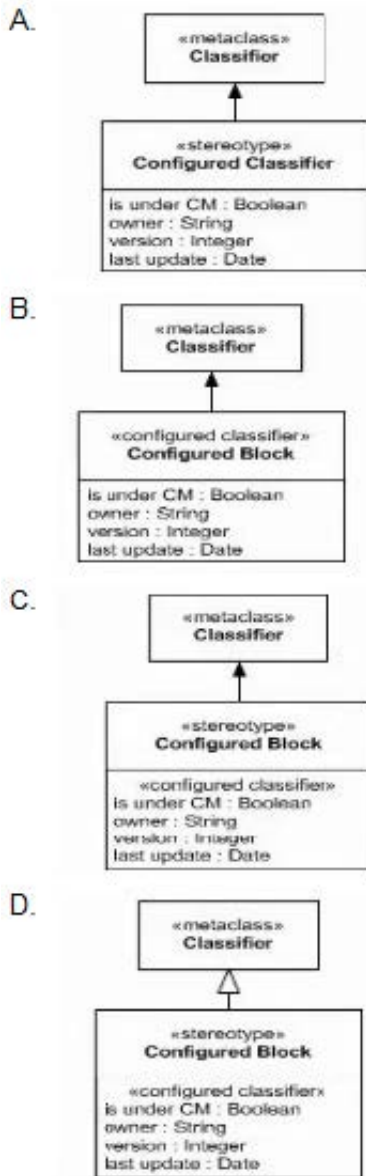
Correct Answer: C

QUESTION 4



Choose the correct answer

Which diagram fragment validly depicts adding properties to a stereotype?



A. Option A

B. Option B

C. Option C

D. Option D

Correct Answer: D



QUESTION 5

Choose the correct answer.

What is the best way to specify the behavior of a functional requirement?

- A. Model an activity that refines the functional requirement.
- B. Model a state machine that refines the functional requirement.
- C. The project methodology will indicate which way is compatible with its process.
- D. The requirement text must be a clear and concise specification of the functionality.

Correct Answer: A

[OMG-OCSMP-MBI300
Study Guide](#)

[OMG-OCSMP-MBI300
Exam Questions](#)

[OMG-OCSMP-MBI300
Braindumps](#)